


Name: \_\_\_\_\_



# Classifying Quadrilaterals

**Directions:** Classify each quadrilateral, as specifically as possible, as a square, rectangle, rhombus, parallelogram, or trapezoid.

1.



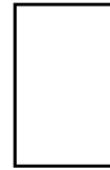
\_\_\_\_\_

4.



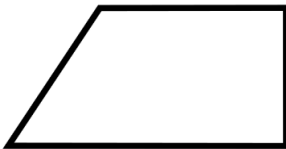
\_\_\_\_\_

7.




\_\_\_\_\_

2.



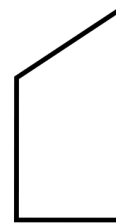
\_\_\_\_\_

5.




\_\_\_\_\_

8.



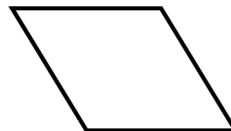
\_\_\_\_\_

3.



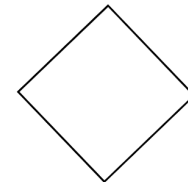
\_\_\_\_\_

6.



\_\_\_\_\_


9.



\_\_\_\_\_


# ANSWER KEY

1.



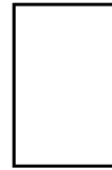
square

4.



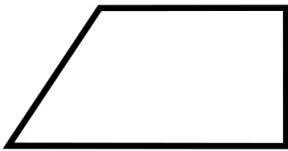
rectangle

7.




rectangle

2.



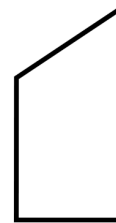
trapezoid

5.



parallelogram

8.



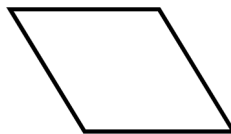
trapezoid

3.



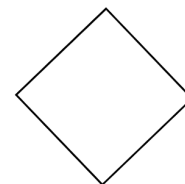
trapezoid

6.



rhombus

9.



square