














Name: _____

Estimating Lengths (Standard)

Directions: Circle the choice that is the best estimate for the length of each object.

<u>OBJECT</u>	<u>CHOICES</u>	<u>MY ANSWER</u>
1.) Pencil 	A) 80 feet B) 80 inches C) 8 feet D) 8 inches	_____
2.) Car 	A) 10 feet B) 10 yards C) 10 inches D) 100 feet	_____
3.) Baseball Bat 	A) 3.5 inches B) 3.5 feet C) 10 inches D) 35 feet	_____
4.) Pillow 	A) 24 feet B) 24 yards C) 22 feet D) 22 inches	_____
5.) Door 	A) 32 inches B) 72 inches C) 122 inches D) 12 yards	_____
6.) Carrot 	A) 4.25 feet B) 4.25 inches C) 42.5 feet D) 42.5 inches	_____
7.) Umbrella 	A) 3 inches B) 3 yards C) 1 yard D) 13 inches	_____

ANSWER KEY

	<u>OBJECT</u>	<u>CHOICES</u>	<u>MY ANSWER</u>
1.)	Pencil 	A) 80 feet B) 80 inches C) 8 feet D) 8 inches	D
2.)	Car 	A) 10 feet B) 10 yards C) 10 inches D) 100 feet	A
3.)	Baseball Bat 	A) 3.5 inches B) 3.5 feet C) 10 inches D) 35 feet	B
4.)	Pillow 	A) 24 feet B) 24 yards C) 22 feet D) 22 inches	D
5.)	Door 	A) 32 inches B) 72 inches C) 122 inches D) 12 yards	B
6.)	Carrot 	A) 4.25 feet B) 4.25 inches C) 42.5 feet D) 42.5 inches	B
7.)	Umbrella 	A) 3 inches B) 3 yards C) 1 yard D) 13 inches	C