

Name: _____

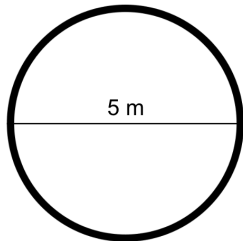


Find the Circumference of a Circle

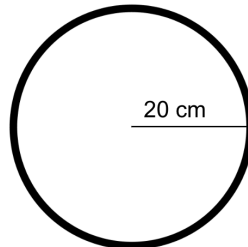
$$c = \pi \times d$$

Directions: Find the circumference of each circle, to the nearest ten thousandth.

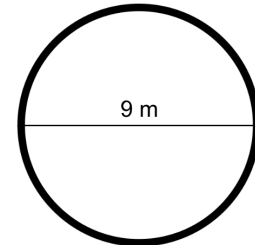
1.



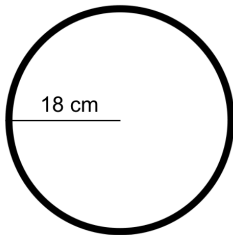
4.



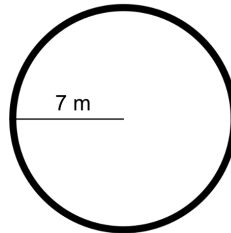
7.



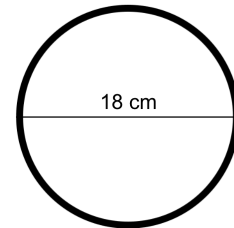
2.



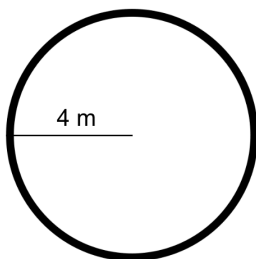
5.



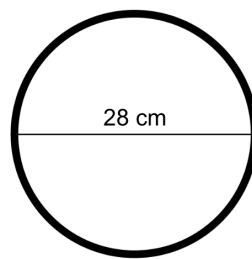
8.



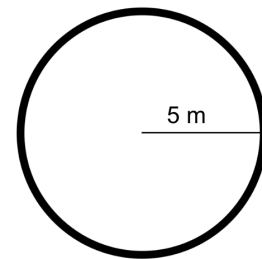
3.



6.

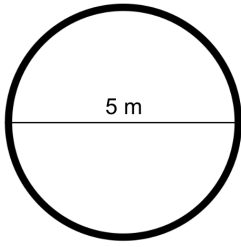


9.



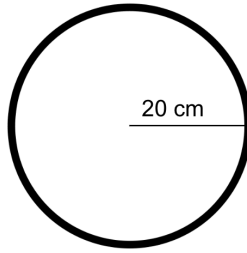
ANSWER KEY

1.



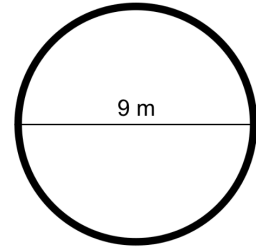
15.71 m²

4.



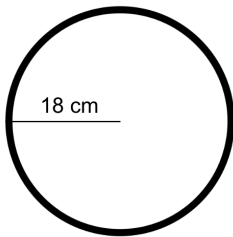
125.66 cm²

7.



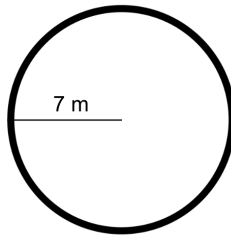
28.27 m²

2.



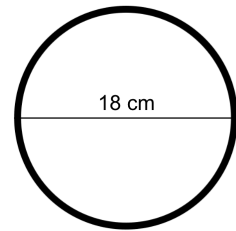
113.1 cm²

5.



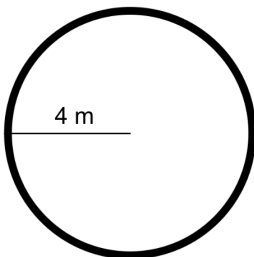
43.98 m²

8.



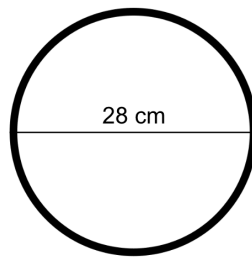
56.55 cm²

3.



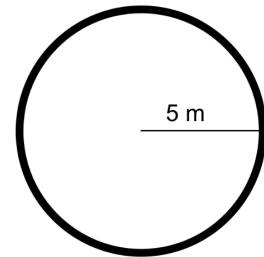
25.13 m²

6.



87.96 cm²

9.



31.42 m²