


Name: _____


Date: _____





Find the Fib!

Use your math skills to determine which of the three statements below is a fib! Explain how you made your decision.



A)  → 4

B)  → 7

C)  → 5

My Answer: _____

Key: A



Looking for more Kindergarten Math Worksheets?

This activity is a free sample from the Pre-K and Kindergarten Math Worksheet Libraries available on our membership site.

Visit www.mashupmath.com/membership-plans to learn more and sign-up for a free trial today!

