

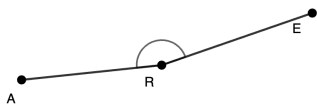
Name: _____



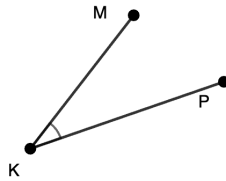
NAMING ANGLES

Directions: Use all three points and name each angle.

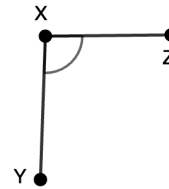
1.



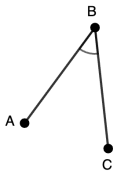
5.



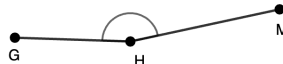
9.



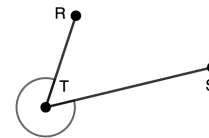
2.



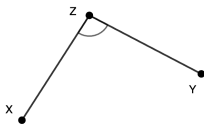
6.



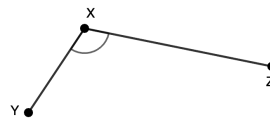
10.



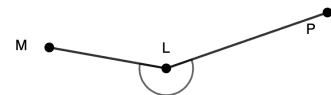
3.



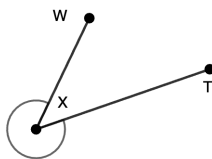
7.



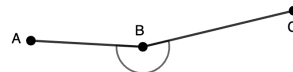
11.



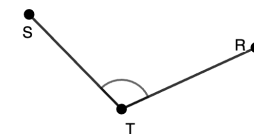
4.



8.

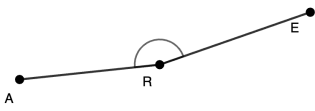


12.



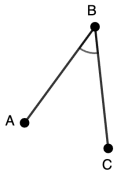
ANSWER KEY

1.



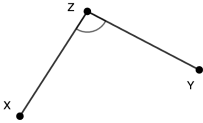
$\angle ARE$ or $\angle ERA$

2.



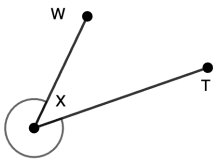
$\angle ABC$ or $\angle CBA$

3.



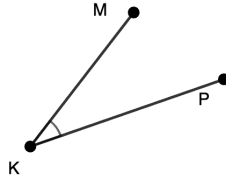
$\angle XZY$ or $\angle YZX$

4.



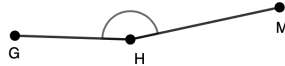
$\angle WXT$ or $\angle TXW$

5.



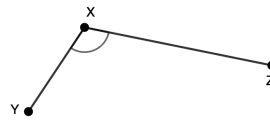
$\angle MKP$ or $\angle PKM$

6.



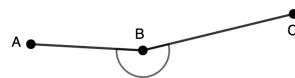
$\angle GHM$ or $\angle MHG$

7.



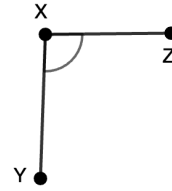
$\angle XZY$ or $\angle YZX$

8.



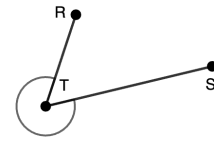
$\angle ABC$ or $\angle CBA$

9.



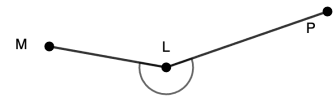
$\angle YXZ$ or $\angle ZXY$

10.



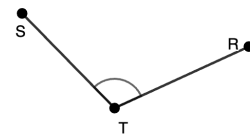
$\angle RTS$ or $\angle STR$

11.



$\angle MLP$ or $\angle PLM$

12.



$\angle STR$ or $\angle RTS$