

Name: _____

Skip Counting by 4



Directions: Complete each chart by skip counting


4		12	16	
---	--	----	----	--

4		12		20	
---	--	----	--	----	--

8		16	20			32
---	--	----	----	--	--	----

16		24	28	32		
----	--	----	----	----	--	--







Directions: Find the value represented by each table by skip counting.

 = 4






TOTAL

									
---	---	---	--	--	--	--	--	--	--









--

									
---	---	---	---	---	---	--	--	--	--












--

									
---	---	---	---	---	--	--	--	--	--

--

									
---	---	---	---	---	---	---	---	--	--

--

										
---	---	---	---	---	---	---	---	---	--	---

--

ANSWER KEY

4	<u>8</u>	12	16	<u>20</u>
----------	-----------------	-----------	-----------	------------------

4	<u>8</u>	12	<u>16</u>	20	<u>24</u>
----------	-----------------	-----------	------------------	-----------	------------------

8	<u>12</u>	16	20	<u>24</u>	<u>28</u>	32
----------	------------------	-----------	-----------	------------------	------------------	-----------

16	<u>20</u>	24	28	32	<u>36</u>	<u>40</u>
-----------	------------------	-----------	-----------	-----------	------------------	------------------

12

24

20

32

40