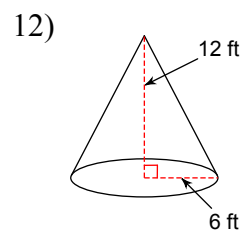
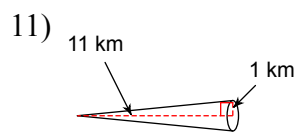
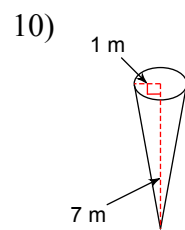
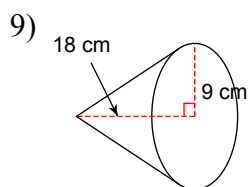
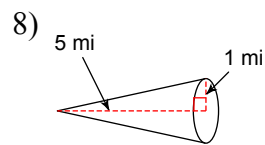
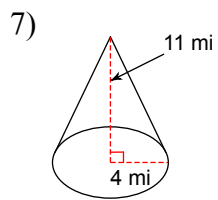
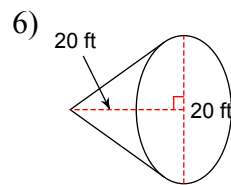
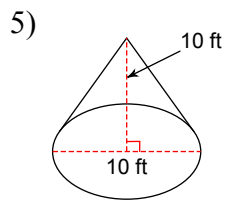
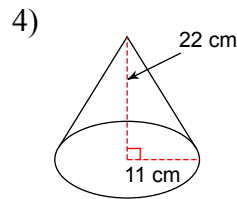
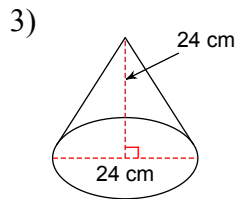
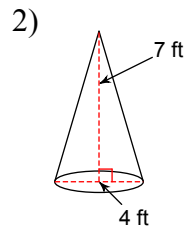
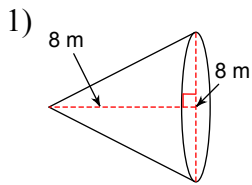


Name: _____



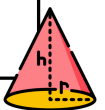
Practice: Finding the Volume of a Cone

Use a formula to find the volume of each cone. Round your answer to the nearest tenth decimal place.



Volume of a Cone

$$V = \pi r^2 \frac{h}{3}$$



ANSWER KEY

Use a formula to find the volume of each cone. Round your answer to the nearest tenth decimal place.

